


Exercises

1) Circle the correct answer to match the pieces of the sandwich.
(The first one has been done for you.)



1 whole | a half | a quarter

1 whole | a half | a quarter



1 whole | a half | a quarter

2) Circle the correct answer to match the pieces of the sandwich.



1 | $\frac{1}{2}$ | $\frac{1}{4}$

1 | $\frac{1}{2}$ | $\frac{1}{4}$

1 | $\frac{1}{2}$ | $\frac{1}{4}$

3) Circle the correct piece of sandwich.

a) $\frac{1}{2}$



b) $\frac{1}{4}$




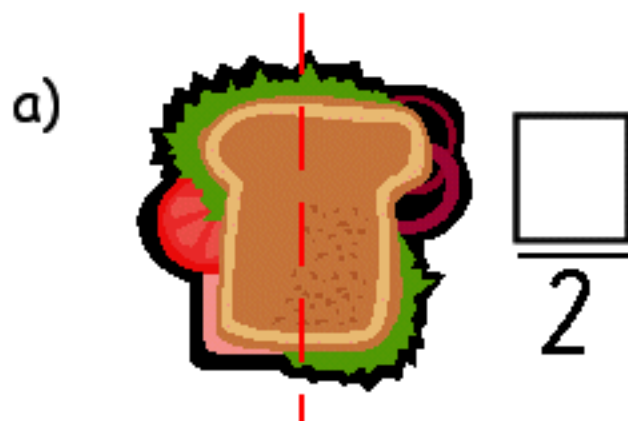
c) 1 whole



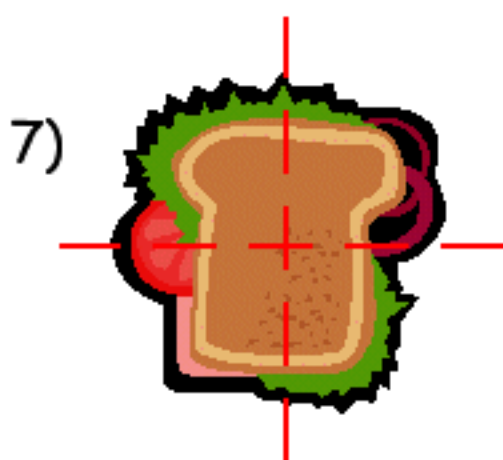
4) When we cut things into equal pieces, the pieces are called:

F R _ C T I O _ S

5) How many halves are there ? (Write the answers in the boxes.)



6) A fraction is written with a top number, a bottom number and a _____ in between. (Fill in the missing word.)

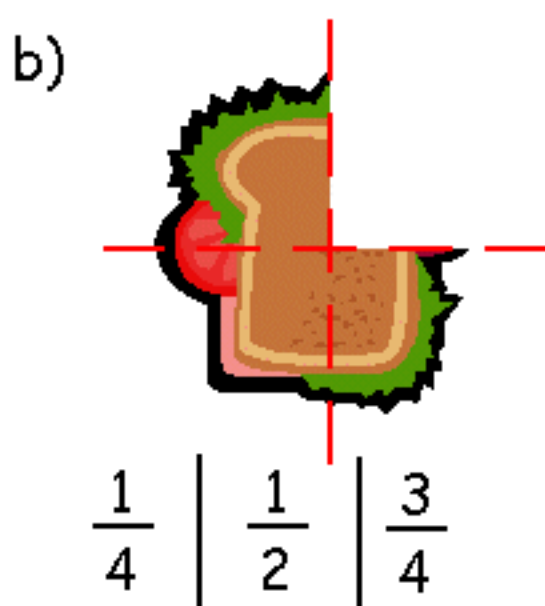
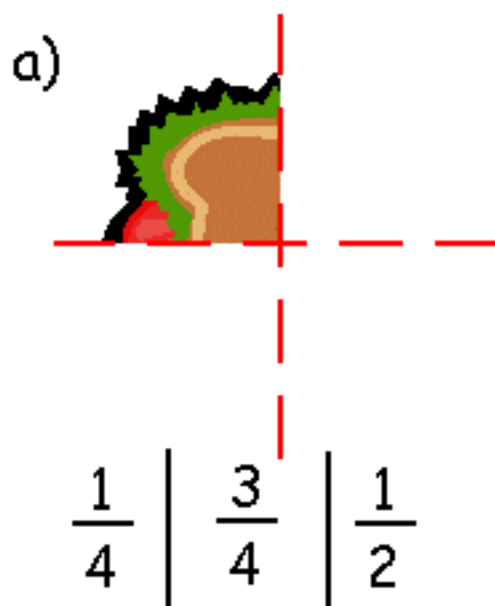


a) This sandwich is divided into \square pieces.

b) We call 4 equal pieces fourths or

q u _____ *s*.

8) Circle the correct fraction to match the pieces of sandwich.



Result

